



Test Name : Grade-6 (Maths Test)

Difficulty Level : Medium

Test Type : Paid

Total Questions : 32

Total Marks : 160.00

Duration : 60.00 mins

---

Q.1

If 48 men can do a piece of work in 96 days, then to finish the same work in 72 days, how many more men are needed?

- A. 12
- B. 16
- C. 18
- D. 24

**Answer : B**

Q.2

Sara answered a set of 12 questions and received 4 marks for each correct answer and -2 marks for each wrong answer. She answered five questions correctly and seven questions incorrectly. What is Sara's total score?

- A. 6
- B. 8
- C. 12
- D. 7

**Answer : B**

Q.3

What is the perimeter of a square if the area of the shaded part is 16 square units?



- A. 8 units
- B. 16 units
- C. 32 units
- D. 64 units

**Answer : C,**

Q.4

If  $x$  is a prime number and  $x+2$  is a prime number, what is true for  $x(x+2)+1$ ?

- A. An odd integer
- B. A prime number
- C. A perfect square
- D. Not a perfect square

**Answer : C,**

Q.5

Which of the following statements is false ?

- A. Through three collinear points, we can draw three lines
- B. Two intersecting lines in a plane determine a point
- C. Lines belonging to the same plane are called coplanar lines
- D. A line is a part of a plane

**Answer : A**

Q.6

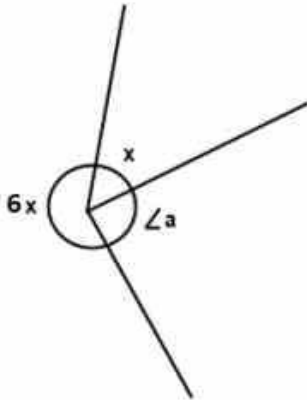
If a rectangular field is 135 m long and 78 m wide, and Aron jogged around it 4 times, how far did he jog?

- A. 426 m
- B. 852 m
- C. 1278 m
- D. 1704 m

**Answer : D**

Q.7

If  $\angle a = 3x$  then, find the value of  $x$ .



- A. 22 degree
- B. 24 degree
- C. 36 degree
- D. 43 degree

**Answer : C**

Q.8

What is the ratio of non-selected children to the total number of children in a cricket coaching camp where 1200 children are trained, and 900 are selected for various matches?

- A. 300 : 120
- B. 4 : 1
- C. 1 : 4
- D. 120 : 300

**Answer : C**

Q.9

Which of the following statements is true if A is the son of C, C and Q are sisters, Z is the mother of Q, and P is the son of Z?

- A. P and A are cousins
- B. P is the maternal uncle of A
- C. Q is the maternal grandfather of A
- D. C and P are sisters

**Answer : B**

Q.10

Complete the given series: 17, 18, 20, ?, 27, 32, 38

- A. 20
- B. 21
- C. 23
- D. 25

**Answer : C**

Q.11

Select the correct option to replace the question mark in the below series:

LAV, MBW, NCX, ODY, ?

- A. PEW
- B. PEZ
- C. PFX
- D. PWS

**Answer : B**

Q.12

If Daniel ranks 7th from the top and 28th from the bottom in a class, how many students are there?

- A. 30
- B. 32
- C. 34
- D. 38

**Answer : C**

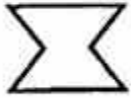
Q.13

Which of the following mirror images is correct for the given word when the mirror is placed vertically to the left of the word? **WHITE**

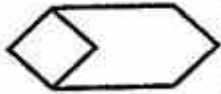
- A. **ЭIHW**
- B. **ETIHW**
- C. **ЭTIHW**
- D. **ETIHW**

**Answer : C**

Q.14




Find the figure in which the above figure is embedded.




A.



B.



C.



D.

**Answer : B**

Q.15

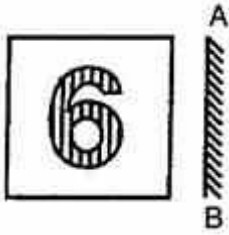
If Ema and Ava were facing each other before sunset, and Ava's shadow was exactly to the right of Ema, which direction was Ema facing?

- A. North
- B. South
- C. East
- D. West

**Answer : A**

Q.16

Which is the correct mirror image for the given figure?



- A.
- B.
- C.
- D.

**Answer : B**

Q.17

What is the difference between the largest and smallest 5-digit numbers formed by the digits 6, 0, 9, and 5 (where 0 is repeated twice)?

- A. 46,431
- B. 49,250
- C. 39,996
- D. 39,600

**Answer : A**

Q.18

How many 3's are there in the given series which are immediately preceded by 9 as well as immediately followed by 6?

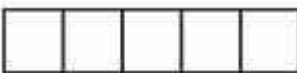

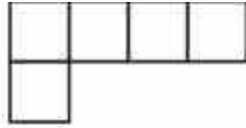
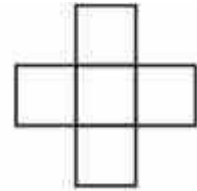
9 6 3 5 4 9 3 3 6 9 3 6 3 9 9 3 3 6 9 3 6

- A. 0
- B. 1
- C. 4
- D. 2

**Answer : D**

Q.19

Which one of the following shapes, made of five same-unit squares, has the smallest perimeter?

- A. 
- B. 
- C. 
- D. 

**Answer : B**

Q.20

The given table shows the temperature of a city for 7 consecutive hours :

Hour	1	2	3	4	5	6	7
Temperature (°C)	-6	15	-2	23	12	0	-4

Calculate the difference between the highest and the lowest temperature of the city over the 7-hour period.

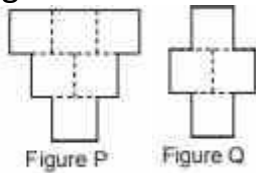
- A. 17°C
- B. 29°C

- C. 21°C
- D. 25°C

Answer : B

Q.21

If Figure P is made up of six identical squares and two squares were removed to form Figure Q, and the perimeter of Figure P is 240 cm, what is the perimeter of Figure Q?



- A. 220 cm
- B. 180 cm
- C. 200 cm
- D. 160 cm

Answer : C

Q.22

What is the missing number in the given pattern?

$$4 \times 4 - 3 \times 3 = 7$$

$$21 \times 21 - 20 \times 20 = 41$$

$$43 \times 43 - 42 \times 42 = 85$$

$$105 \times 105 - 104 \times 104 = ?$$

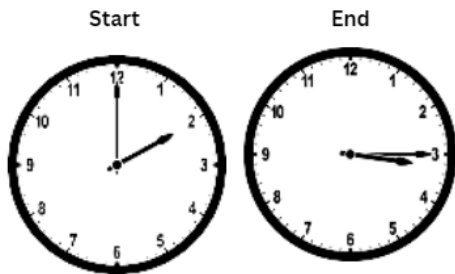
- A. 3402
- B. 2194
- C. 903
- D. 209

Answer : D



Q.23

How many right angles did the minute hand of the clock travel in the diagram below, showing Ben's time doing his homework?



- A. 10
- B. 35
- C. 12
- D. 5

**Answer : D**

Q.24

What is the total number of marbles stored in a godown that contained 266 bags of marbles, if each bag had 49 marbles?

- A. 13,034
- B. 12,035
- C. 15,034
- D. 13,000

**Answer : A**

Q.25

The smallest number which when decreased by 7 is exactly divisible by 8, 14, 24, and 36, is:

- A. 497
- B. 504
- C. 511
- D. 490

**Answer : C**

Q.26

If 50% of a number (x) is equal to two-fifth of another number (y), what is the ratio of the first number (x) to the second number (y)?

- A. 3 : 4
- B. 4 : 5
- C. 5 : 6
- D. 5 : 4

**Answer : B**

Q.27

If  $\frac{4}{7} < \frac{4+3}{7+4} < \frac{3}{4}$ , then

- A.  $\frac{4}{7} < \frac{4+3}{7+4} < \frac{3}{4}$
- B.  $\frac{4}{7} < \frac{4 \times 3}{7 \times 4} < \frac{3}{4}$
- C.  $\frac{4}{7} < \frac{4-3}{7-4} < \frac{3}{4}$
- D. None of these

**Answer : A**

Q.28

Count the number of small cubes in the given figure.

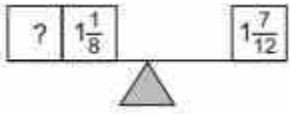


- A. 10
- B. 7
- C. 8
- D. 9

**Answer : B**

Q.29

To balance the scale, find the missing fraction.



- A.  $\frac{11}{24}$
- B.  $\frac{10}{24}$
- C.  $\frac{5}{24}$
- D.  $\frac{1}{24}$

**Answer : A**

Q.30

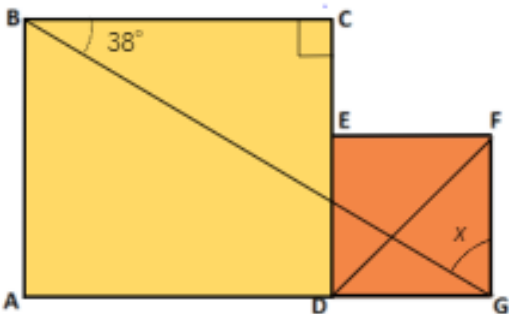
Evaluate :  $- 1 + 55 - (- 29) + (- 1) - (- 82) + (- 3)$

- A. 161
- B. - 161
- C. 158
- D. - 158

**Answer : A**

Q.31

The figure, not drawn to scale, is made up of 2 squares ABCD and EFGD. Find  $\angle x$

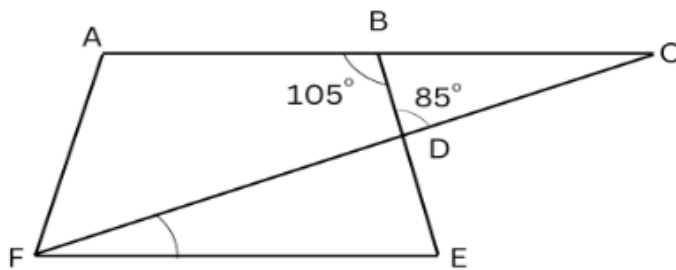


- A. 36 degrees
- B. 52 degrees
- C. 83 degrees
- D. 97 degrees

**Answer : B**

Q.32

In the figures below, ABEF is a trapezium and BCD is a triangle. ABC is a straight line and  $\angle FDE = \angle CDB$ . Find  $\angle DFE$



- A. 6 degree
- B. 20 degree
- C. 15 degree
- D. 10 degree

**Answer : B**