



Olympiad World
www.olympiadworld.com
myolympiadworld@gmail.com

Test Name : Grade-1 (Maths Test)
Difficulty Level : Medium
Test Type : Paid

Total Questions : 32
Total Marks : 160.00
Duration : 60.00 mins

Q.1

What is the result of 15 minus 3?

- A. 11
- B. 12
- C. 13
- D. 14

Answer : B

Q.2

Alice has 5 apples. Her friend gave her 2 more apples. How many apples does Alice have now?




- A. 5
- B. 6
- C. 7
- D. 8

Answer : C

Q.3



Which figure completes the pattern?



Answer : A

Q.4

What is the place value of 0 in the number 90?

- A. Ones place
- B. Tens place
- C. Hundreds place
- D. Thousands place

Answer : A

Q.5
Which is the 9th month of the year?

- A. May
- B. August
- C. October
- D. September

Answer : D

Q.6
When do people usually eat breakfast?



- A. Morning
- B. Afternoon
- C. Evening
- D. Night

Answer : A,

Q.7

How many cents are in a nickel?

- A. 1 cent
- B. 5 cents
- C. 10 cents
- D. 25 cents

Answer : B,

Q.8

Which shape has only one side?

A. Circle



B. Square



C. Triangle



D. Line



Answer : D,

Q.9

If "APPLE" is coded as "BQQMF," what is the second letter of the code for "APPLE"?

- A. B
- B. Q

- C. M
- D. F

Answer : B,

Q.10

Sara bakes 14 cakes on Monday, 9 cakes on Saturday, 10 cakes on Sunday, and she ate 5 cakes. Find the number of remaining cakes Sara has.

- A. 28
- B. 40
- C. 32
- D. 24

Answer : A,

Q.11

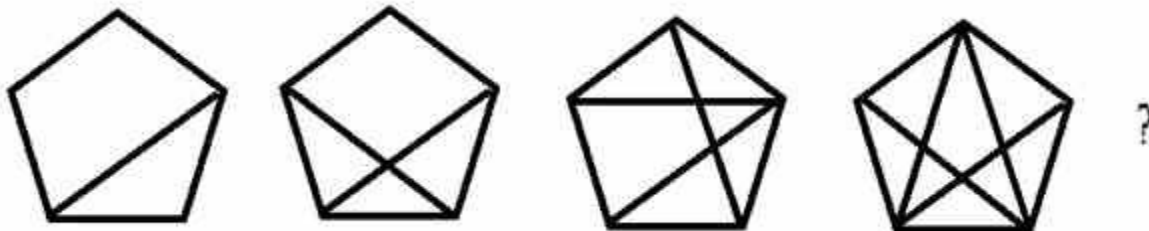
Rachel is counting by 5s. She says 5, 10, 15, 20, 25, and then stops. What number comes after 25?


- A. 30
- B. 31
- C. 32
- D. 33

Answer : A,

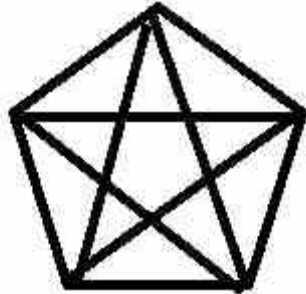
Q.12

Which figure would come next in the pattern?

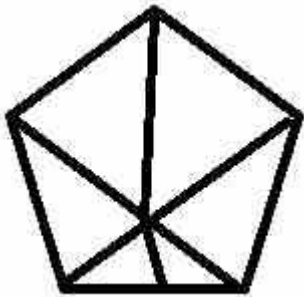




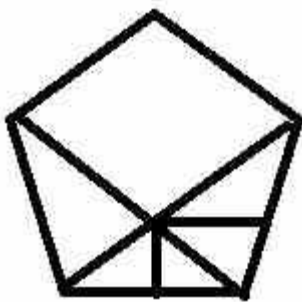
A.



B.



C.



D.

Answer : B,

Q.13
Which number is the odd one out: 3, 5, 7, 10?

A. 3

- B. 5
- C. 7
- D. 10

Answer : D,

Q.14

In a certain code language, "DNEIRF" is coded as "FRIEND." What is the code for "MODERATE"?

- A. ETAREDOM
- B. DOMATEER
- C. ERATEODM
- D. EDOMRATE

Answer : A,

Q.15

Which pattern alternates between adding 2 and 3?

- A. 1, 3, 6, 8, 11
- B. 2, 4, 7, 9, 14
- C. 3, 5, 8, 10, 15
- D. 4, 6, 9, 11, 10

Answer : A,

Q.16

What comes next in the pattern: 6, 10, 14, 18,?

- A. 20
- B. 21
- C. 22
- D. 24

Answer : C,

Q.17

Which digit in the number 425 represents the tens place?

- A. $3 + 1 = 4$
- B. $3 - 1 = 2$
- C. $3 - 2 = 1$
- D. $3 + 2 = 5$

Answer : B,

Q.18

There are 42 boys and 13 girls in the class. What is the total number of students in the class?

- A. 45
- B. 55
- C. 65
- D. 56

Answer : B,

Q.19

Tom had 20 toy soldiers. He lost 9 of his 20 toy soldiers. How many toy soldiers does Tom have now?

- A. 6
- B. 7
- C. 8
- D. 11

Answer : D,

Q.20



Between a big ball and a small pencil, which one is lighter?

- A. Ball
- B. Pencil
- C. They weigh the same
- D. None of the above

Answer : A,

Q.21

What month is it if there are 25 days left until Christmas and you are counting down the days?

- A. November
- B. December
- C. January
- D. February

Answer : B,

Q.22

Which of the following notes/bills is worth more?

- A. a five-dollar bill
- B. a ten-dollar bill
- C. both A and B.
- D. None of the above

Answer : B,

Q.23

Can you identify which season is frequently the warmest and best for swimming and outdoor activities?



A. Spring



B. Summer



C. Fall



D. Winter

Answer : B,

Q.24

Which of the following surfaces will cause an item to roll more quickly?

- A. a rough surface
- B. A bumpy surface
- C. A flat surface
- D. A soft surface

Answer : C,

Q.25

Which of the following units would be most appropriate for calculating the distance between two trees in a park?

- A. Meters
- B. Kilograms
- C. Liters
- D. Seconds

Answer : A,

Q.26

Jane owns ten crayons. She offered her friend four crayons. How many crayons does Jane have now?

- A. 3
- B. 4
- C. 5
- D. 6

Answer : D,

Q.27

What is the place value of the digit 6 in the number 168?

- A. 6
- B. 60
- C. 600
- D. 6,000

Answer : B,

Q.28

A basket contains 12 apples. How many apples are left in the basket after 4 apples are removed?

- A. 4

- B. 6
- C. 8
- D. 10

Answer : C,

Q.29

What time will it be two hours later if it is 11:00 a.m.?

- A. 11:00 p.m.
- B. 12:00 p.m.
- C. 01:00 p.m.
- D. 2:00 p.m.

Answer : C,

Q.30

If you have 4 dollars and want to buy a 1 dollar pencil and a 2 dollar book, how much money will you have left after buying the pencil and the book?

- A. 1 dollar
- B. 2 dollars
- C. 3 dollars
- D. 4 dollars

Answer : A,

Q.31

How much money do you have left in cents if you have 10 dimes and 10 pennies and spend 3 dimes and 5 pennies?

- A. 50 cents
- B. 55 cents
- C. 65 cents
- D. 75 cents

Answer : D,

Q.32

How many pencils are left in Riya's pencil box after 15 pencils broke from the initial 40 pencils?

- A. 10
- B. 15
- C. 25
- D. 26

Answer : C,